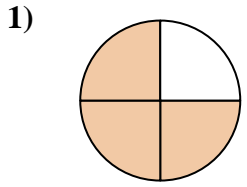


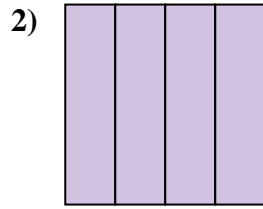


Determine which letter best describes the shaded portion.

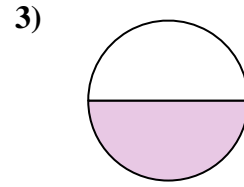
**Answers**



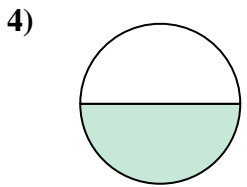
- A. four-fourths
- B. two-halves
- C. three-fourths



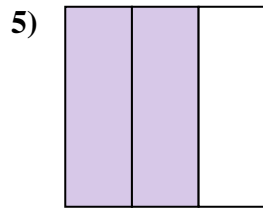
- A. one-half
- B. four-fourths
- C. one-quarter



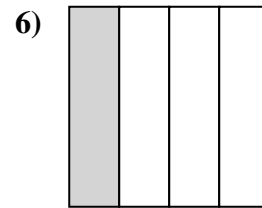
- A. one-half
- B. two-halves
- C. three-quarters



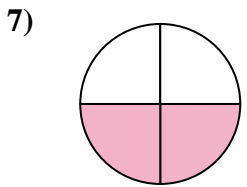
- A. one-half
- B. two-fourths
- C. two-halves



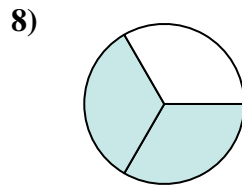
- A. two-quarters
- B. one-fourth
- C. two-thirds



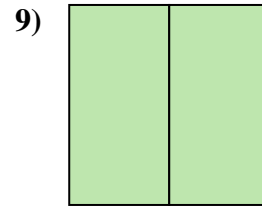
- A. four-quarters
- B. two-halves
- C. one-quarter



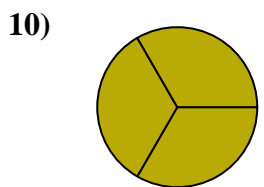
- A. four-fourths
- B. one-quarter
- C. two-quarters



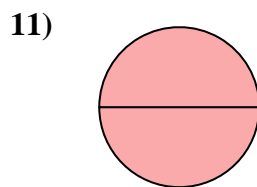
- A. one-half
- B. two-halves
- C. two-thirds



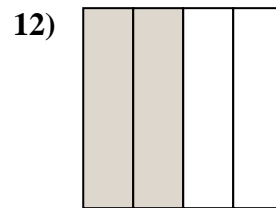
- A. two-halves
- B. one-half
- C. two-quarters



- A. three-thirds
- B. three-quarters
- C. two-halves



- A. two-fourths
- B. one-quarter
- C. two-halves

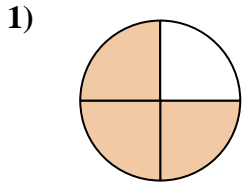


- A. one-quarter
- B. two-quarters
- C. one-half

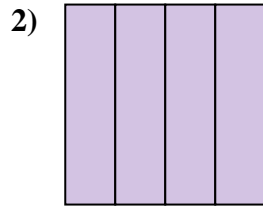
1. \_\_\_\_\_
2. \_\_\_\_\_
3. \_\_\_\_\_
4. \_\_\_\_\_
5. \_\_\_\_\_
6. \_\_\_\_\_
7. \_\_\_\_\_
8. \_\_\_\_\_
9. \_\_\_\_\_
10. \_\_\_\_\_
11. \_\_\_\_\_
12. \_\_\_\_\_



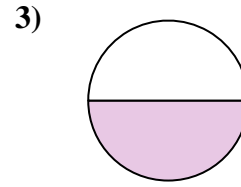
Determine which letter best describes the shaded portion.



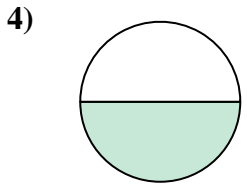
- A. four-fourths
- B. two-halves
- C. three-fourths



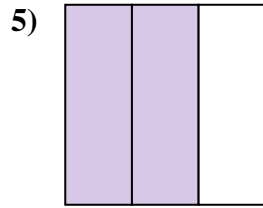
- A. one-half
- B. four-fourths
- C. one-quarter



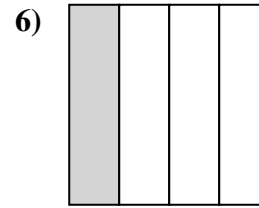
- A. one-half
- B. two-halves
- C. three-quarters



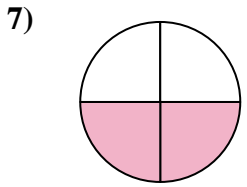
- A. one-half
- B. two-fourths
- C. two-halves



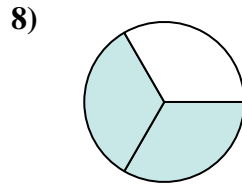
- A. two-quarters
- B. one-fourth
- C. two-thirds



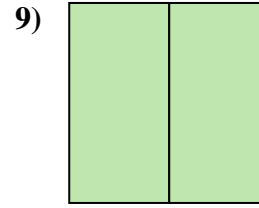
- A. four-quarters
- B. two-halves
- C. one-quarter



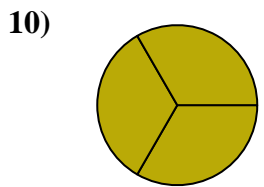
- A. four-fourths
- B. one-quarter
- C. two-quarters



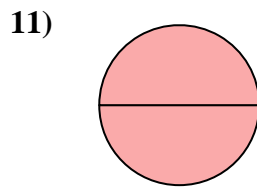
- A. one-half
- B. two-halves
- C. two-thirds



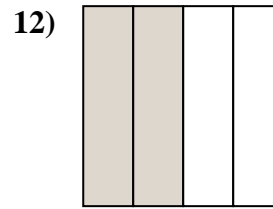
- A. two-halves
- B. one-half
- C. two-quarters



- A. three-thirds
- B. three-quarters
- C. two-halves



- A. two-fourths
- B. one-quarter
- C. two-halves



- A. one-quarter
- B. two-quarters
- C. one-half

**Answers**

- 1.     **C**
- 2.     **B**
- 3.     **A**
- 4.     **A**
- 5.     **C**
- 6.     **C**
- 7.     **C**
- 8.     **C**
- 9.     **A**
- 10.     **A**
- 11.     **C**
- 12.     **B**